

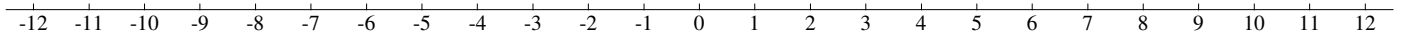
---

# Ordering Integers (B)

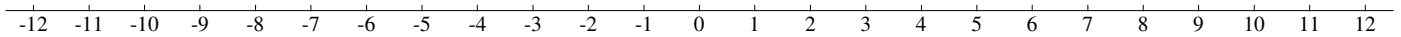
---

Instructions: Order each set of integers on the number line.

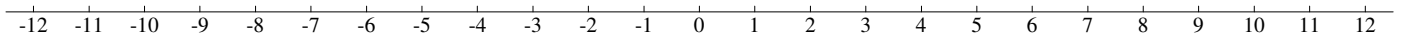
Set 1: -6, -9, -5, 4, -12, -5, 4, 11, -12, 12



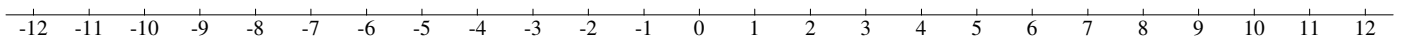
Set 2: 2, -6, -1, 11, -2, 10, 2, 7, 8, 12



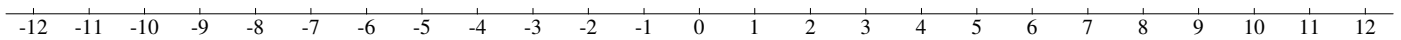
Set 3: -12, 5, 3, -3, 2, 1, 3, -12, -5, 0



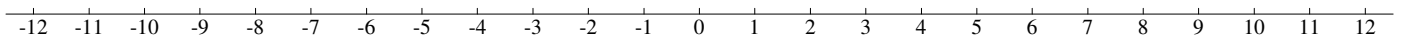
Set 4: -11, -11, 10, -3, -12, 10, 12, -1, -6, 12



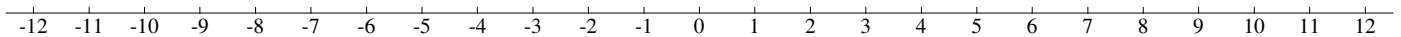
Set 5: 4, -8, -10, -1, 10, 12, 6, 6, 10, 11



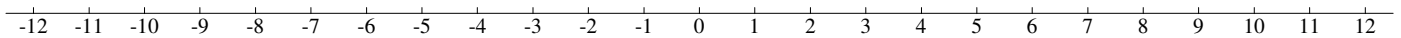
Set 6: -3, 11, 7, -3, 11, -7, 4, 5, 7, -5



Set 7: 1, -11, 0, 6, -7, -9, 11, -3, -7, -2



Set 8: 3, 12, -6, 7, 6, 2, 5, -1, 4, 2



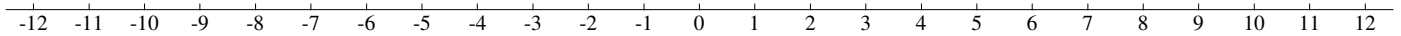
---

# Ordering Integers (B) Answers

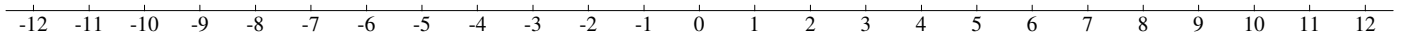
---

Instructions: Order each set of integers on the number line.

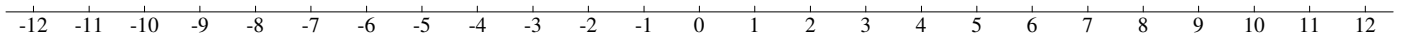
Set 1: -6, -9, -5, 4, -12, -5, 4, 11, -12, 12



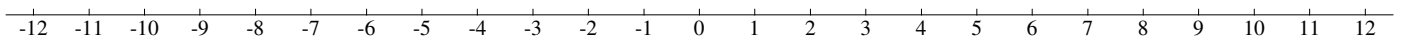
Set 2: 2, -6, -1, 11, -2, 10, 2, 7, 8, 12



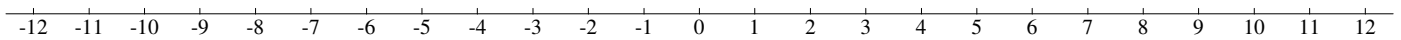
Set 3: -12, 5, 3, -3, 2, 1, 3, -12, -5, 0



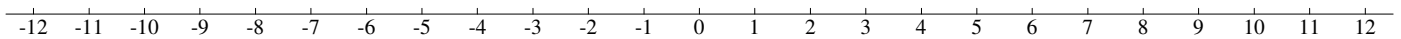
Set 4: -11, -11, 10, -3, -12, 10, 12, -1, -6, 12



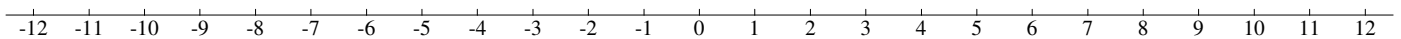
Set 5: 4, -8, -10, -1, 10, 12, 6, 6, 10, 11



Set 6: -3, 11, 7, -3, 11, -7, 4, 5, 7, -5



Set 7: 1, -11, 0, 6, -7, -9, 11, -3, -7, -2



Set 8: 3, 12, -6, 7, 6, 2, 5, -1, 4, 2

